


Subject - Maths

Class- I


Topic- Addition up to 10



### Exercise-9


Use Cordova Smart Class Software on the smart board in class to do Exercise.

### Story Sums

- 


Sumit has 5 marbles and Amit has 4. What is the total number of marbles with them?

Ans. Total number of marbles is 9.

5
+ 4
9
- 

Angel has 2 books. Her mother gives her 4 more. How many books does she have now?

Ans. Angel has 6 books.

2
+ 4
6
- 

Radhika eats 3 biscuits. Then, she eats 5 biscuits more. How many biscuits does she eat in all?

Ans. Radhika eats 8 biscuits.

3
+ 5
8

## Review Exercise

1. Find the sum :

a

7
+ 1
8

b

2
+ 4
6

c

6
+ 0
6

d

5
+ 2
7

2. Add :

(a)  $3 + 3 = 6$

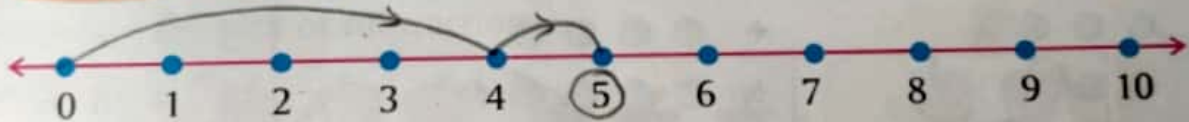
(b)  $4 + 4 = 8$

(c)  $2 + 2 = 4$

(d)  $1 + 1 = 2$

3. Add on the number line :

$4 + 1 = 5$



4. Raju has 6 biscuits in one hand and 2 biscuits in the other hand. How many biscuits does he have in total?

Ans.  $6 + 2 = 8$

5. The teacher gives Ally 6 stars for good behaviour on Monday. Then she gives 3 more on Friday. How many stars does Ally get in total? Do you think Ally is a good girl? (Value Corner) Ans.

$$\begin{array}{r} 6 \\ + 3 \\ \hline 9 \end{array}$$



Shot on OnePlus  
Powered by Dual Camera