

Subject - Maths

Class - II

Topic - Addition of 2-digit numbers

Exercise-1
Do you remember





Find the sum :

<p>1. <table style="margin: auto;"><tr><td>T</td><td>O</td></tr><tr><td>2</td><td>6</td></tr><tr><td>+</td><td>3</td></tr><tr><td>3</td><td></td></tr><tr><td colspan="2"><hr/></td></tr></table></p>	T	O	2	6	+	3	3		<hr/>		<p>2. <table style="margin: auto;"><tr><td>T</td><td>O</td></tr><tr><td>4</td><td>8</td></tr><tr><td>+</td><td>1</td></tr><tr><td>1</td><td></td></tr><tr><td colspan="2"><hr/></td></tr></table></p>	T	O	4	8	+	1	1		<hr/>		<p>3. <table style="margin: auto;"><tr><td>T</td><td>O</td></tr><tr><td>1</td><td>5</td></tr><tr><td>+</td><td>3</td></tr><tr><td>2</td><td></td></tr><tr><td colspan="2"><hr/></td></tr></table></p>	T	O	1	5	+	3	2		<hr/>		<p>4. <table style="margin: auto;"><tr><td>T</td><td>O</td></tr><tr><td>2</td><td>1</td></tr><tr><td>+</td><td>5</td></tr><tr><td>7</td><td></td></tr><tr><td colspan="2"><hr/></td></tr></table></p>	T	O	2	1	+	5	7		<hr/>	
T	O																																										
2	6																																										
+	3																																										
3																																											
<hr/>																																											
T	O																																										
4	8																																										
+	1																																										
1																																											
<hr/>																																											
T	O																																										
1	5																																										
+	3																																										
2																																											
<hr/>																																											
T	O																																										
2	1																																										
+	5																																										
7																																											
<hr/>																																											
<p>5. <table style="margin: auto;"><tr><td>T</td><td>O</td></tr><tr><td>4</td><td>7</td></tr><tr><td>+</td><td>3</td></tr><tr><td>2</td><td></td></tr><tr><td colspan="2"><hr/></td></tr></table></p>	T	O	4	7	+	3	2		<hr/>		<p>6. <table style="margin: auto;"><tr><td>T</td><td>O</td></tr><tr><td>5</td><td>4</td></tr><tr><td>+</td><td>1</td></tr><tr><td>4</td><td></td></tr><tr><td colspan="2"><hr/></td></tr></table></p>	T	O	5	4	+	1	4		<hr/>		<p>7. <table style="margin: auto;"><tr><td>T</td><td>O</td></tr><tr><td>6</td><td>1</td></tr><tr><td>+</td><td>1</td></tr><tr><td>7</td><td></td></tr><tr><td colspan="2"><hr/></td></tr></table></p>	T	O	6	1	+	1	7		<hr/>		<p>8. <table style="margin: auto;"><tr><td>T</td><td>O</td></tr><tr><td>3</td><td>4</td></tr><tr><td>+</td><td>5</td></tr><tr><td>3</td><td></td></tr><tr><td colspan="2"><hr/></td></tr></table></p>	T	O	3	4	+	5	3		<hr/>	
T	O																																										
4	7																																										
+	3																																										
2																																											
<hr/>																																											
T	O																																										
5	4																																										
+	1																																										
4																																											
<hr/>																																											
T	O																																										
6	1																																										
+	1																																										
7																																											
<hr/>																																											
T	O																																										
3	4																																										
+	5																																										
3																																											
<hr/>																																											

Cordova Learning Series MATHEMATICS-2 **27**

Exercise-2
Use Cordova Smart Class Software on the smart board in class to do Exercise.

Word Problems

<p>1. </p>	<p>In my class, there are 42 boys and 35 girls. How many students are there in the class?</p> <p>Ans. There are students in the class.</p>	<table style="margin: auto;"><tr><td>T</td><td>O</td></tr><tr><td>4</td><td>2</td></tr><tr><td>+</td><td>3</td></tr><tr><td>5</td><td></td></tr><tr><td colspan="2"><hr/></td></tr></table>	T	O	4	2	+	3	5		<hr/>	
T	O											
4	2											
+	3											
5												
<hr/>												
<p>2. </p>	<p>Raman plants some flowers in his garden. 54 flowers are pink in colour and 22 flowers are yellow in colour. How many flowers does Raman plant?</p> <p>Ans. Raman plants flowers.</p>	<table style="margin: auto;"><tr><td>T</td><td>O</td></tr><tr><td>5</td><td>4</td></tr><tr><td>+</td><td>2</td></tr><tr><td>2</td><td></td></tr><tr><td colspan="2"><hr/></td></tr></table>	T	O	5	4	+	2	2		<hr/>	
T	O											
5	4											
+	2											
2												
<hr/>												
<p>3. </p>	<p>Jyoti makes a necklace using 37 white beads and 20 pink beads. How many beads are there in the necklace?</p> <p>Ans. Total number of beads is</p>	<table style="margin: auto;"><tr><td>T</td><td>O</td></tr><tr><td>3</td><td>7</td></tr><tr><td>+</td><td>2</td></tr><tr><td>0</td><td></td></tr><tr><td colspan="2"><hr/></td></tr></table>	T	O	3	7	+	2	0		<hr/>	
T	O											
3	7											
+	2											
0												
<hr/>												
<p>4. </p>	<p>Rohan was reading a book. He read 41 pages on Monday and 45 pages on Tuesday. How many pages did he read in the two days?</p> <p>Ans. Rohan read pages.</p>	<table style="margin: auto;"><tr><td>T</td><td>O</td></tr><tr><td>4</td><td>1</td></tr><tr><td>+</td><td>4</td></tr><tr><td>5</td><td></td></tr><tr><td colspan="2"><hr/></td></tr></table>	T	O	4	1	+	4	5		<hr/>	
T	O											
4	1											
+	4											
5												
<hr/>												

NOTE : Answers are given at the back of the book.