

Subject - Maths


Class - II

Topic - Subtraction of 2-digit numbers

### Exercise-5


Use Cordova Smart Class Software on the smart board in class to do Exercise.

#### Word Problems

- 


In a cricket match, Ajay scored 67 runs and Tarun scored 83 runs. Who scored more runs and how many more?

Ans. .... scored  
..... runs more.

T	O
8	3
-	6 7
- 


45 birds were flying in the sky. If 18 of them sat on a tree, how many birds are still flying in the sky?

Ans. .... birds are still flying.

T	O
4	5
-	1 8
- 

Ankur has 60 pencils. Sneha has 48 pencils. Who has more pencils and how many more?

Ans. .... has ..... pencils more.

T	O
6	0
-	4 8
- 

A fruit seller has 52 watermelons. He sells 27 out of them in a day. How many watermelons are still left?

Ans. .... watermelons are left.

T	O
5	2
-	2 7

42 Cordova Learning Series MATHEMATICS-2

### Review Exercise

- Subtract :
  - |   |     |
|---|-----|
| T | O   |
| 6 | 4   |
| - | 4 2 |
|   |     |
  - |   |     |
|---|-----|
| T | O   |
| 8 | 3   |
| - | 6 9 |
|   |     |
  - |   |     |
|---|-----|
| T | O   |
| 8 | 8   |
| - | 6 4 |
|   |     |
  - |   |     |
|---|-----|
| T | O   |
| 7 | 6   |
| - | 4 9 |
|   |     |
- A fruit seller had 98 oranges. He sold 49 oranges in a day. How many oranges are left with him now?  

$$\begin{array}{r} 98 \\ - 49 \\ \hline \end{array}$$
- Radhika has 52 crayons and her brother Rohan has 32 crayons. How many more crayons does Radhika have?  

$$\begin{array}{r} 52 \\ - 32 \\ \hline \end{array}$$

**HOTS Question**

NOTE : Answers are given at the back of the book.