

Subject - Maths

Class - II


Topic - ADDITION AND SUBTRACTION OF GREATER NUMBERS

Question: Find the answer and write it in the given blank.

**Exercise-5**


Use Cordova Smart Class Software on the smart board in class to do Exercise.

**Add or Subtract :**

- 


A school library has 256 books in English and 175 books in Hindi. Find the number of English and Hindi books in the library.

**Ans.** Number of English and Hindi books is .....

H	T	O
2	5	6
+	1	7
_____		
- 


A tree has 312 red and green apples. If 127 apples are red, how many apples are green?

**Ans.** ..... apples are green.

H	T	O
3	1	2
-	1	2
_____		
- 

Mukta has a book with 400 pages. She read 132 pages yesterday. How many pages are left to be read?

**Ans.** ..... pages are left to be read.

H	T	O
4	0	0
-	1	3
_____		
- 

Aman and his friend Raj collect stamps. Aman has 299 stamps and Raj has 135 stamps. What is the total number of stamps with them?

**Ans.** Total number of stamps is .....

H	T	O
2	9	9
+	1	3
_____		

Cordova Learning Series MATHEMATICS-2 51

**Review Exercise**

**1. Add:**

- | H     | T | O |
|-------|---|---|
| 3     | 8 | 2 |
| +     | 2 | 6 |
| _____ |   |   |
- | H     | T | O |
|-------|---|---|
| 8     | 0 | 5 |
| +     | 1 | 2 |
| _____ |   |   |
- | H     | T | O |
|-------|---|---|
| 3     | 6 | 0 |
| +     | 2 | 9 |
| _____ |   |   |

**2. Subtract:**

- | H     | T | O |
|-------|---|---|
| 5     | 6 | 9 |
| -     | 3 | 8 |
| _____ |   |   |
- | H     | T | O |
|-------|---|---|
| 8     | 6 | 7 |
| -     | 4 | 9 |
| _____ |   |   |
- | H     | T | O |
|-------|---|---|
| 8     | 6 | 4 |
| -     | 3 | 7 |
| _____ |   |   |

NOTE : Answers are given at the back of the book.