

Internal Assessment – Jan 2021

CLASS: V

SUB: MATHEMATICS

Max. Marks: 30

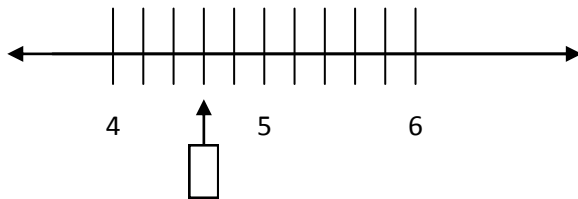
Submission Date: 1th Feb 2021

(Section-A)

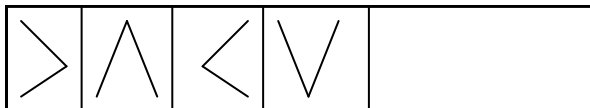
1×8=8marks

Fill in the blanks:

- Write 7089 in words.....
- The place value of 4 and 1 in the number 47021 isand.....
- What should be added to 5000 to get 9630?
- What is dividend in the expression $850 \div 1 = 50$?
- Division by 0 is not possible..... (True /False)
-is a factor of all the numbers.
- Find out the fraction which would come in the box given below:



- Extend the following pattern :



(Section-B)

2×4=8 Marks

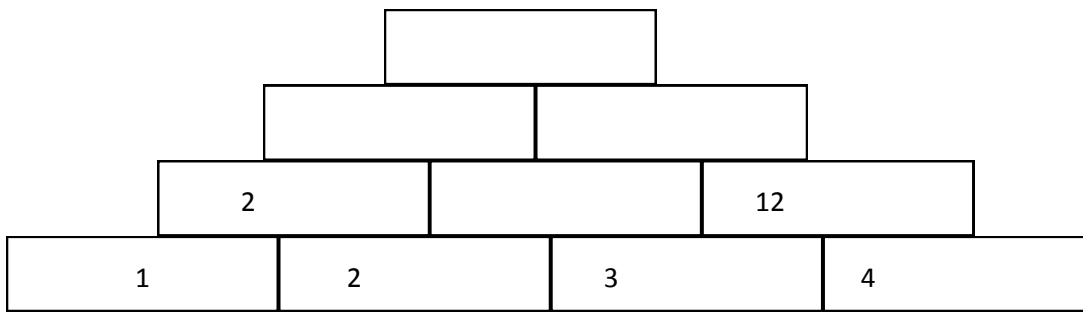
- Write the smallest and the greatest five digit number formed by using the digits 5,3,0,4,1?
- Match Part 'A' with Part 'B':

Serial No.	Part 'A'	Part 'B'
1.	$472 + 100$	30
2.	$20 + 10$	2059
3.	$527 - 27$	572
4.	$2079 - 20$	500

- (a) Find out L.C.M of 8 and 12.

(b) Find out the highest number which can exactly divides 45 and 75?

12. Understand the pattern and fill in the blanks :



(Section-C)

4×2=8 Marks

13. Solve the following :

(i)
$$\begin{array}{r} 5047 \\ +3865 \\ \hline \\ \hline \end{array}$$

(ii)
$$\begin{array}{r} 6000 \\ - 3542 \\ \hline \\ \hline \end{array}$$

14. Two milk containers filled with 20 litres and 30 litres of milk respectively. What will be the greatest measurement of a container that can measure total milk of both containers exactly?

(Section-D)

6×1=6 Marks

15. Solve the following:

(i) A packet contains 12 ballons. How many ballons will be there in 25 such Packets?

(ii) How many years are there in 936 months? Find out.